

NOTE:

This document contains both the pre- and post- test and the pages are labeled accordingly.

The Large Scale Structure of the Universe

Pre-test

Name _____ Date _____
 Graduation Date _____ Major _____

Rank the following three galaxies in order of the distance, closest to the most distant, using the spectra below.

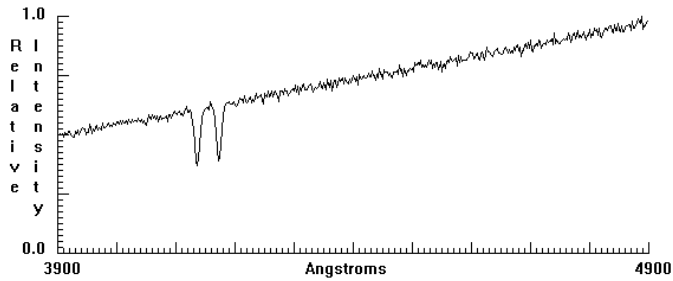


Figure 1

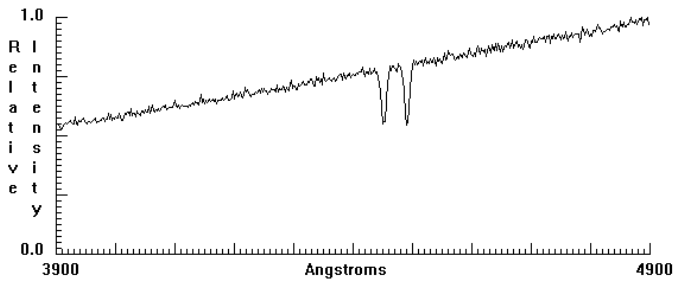


Figure 2

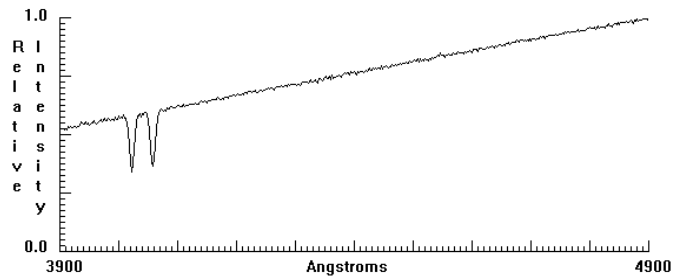
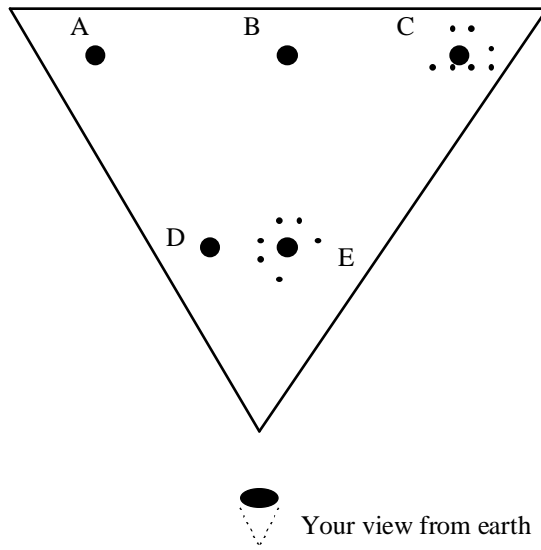


Figure 3

Closest _____ Most Distant _____

2. Below is figure illustrating a portion of the sky containing five galaxies.



- a. List two galaxies that are traveling at the same speed.
- b. What is the speed of these galaxies?
- c. List the two galaxies that would appear close to one another on a photograph of the sky?
- d. List a galaxy that is in the most distance portion of the sky shown here.

3. What is meant by the Hubble Redshift Distance Relation?

4. How can you tell the difference between a star and a galaxy?

5. Describe how galaxies are distributed throughout the universe.

The Large Scale Structure of the Universe

Post-test

Name _____ Date _____
 Graduation Date _____ Major _____

Rank the following three galaxies in order of the distance, closest to the most distant, using the spectra below.

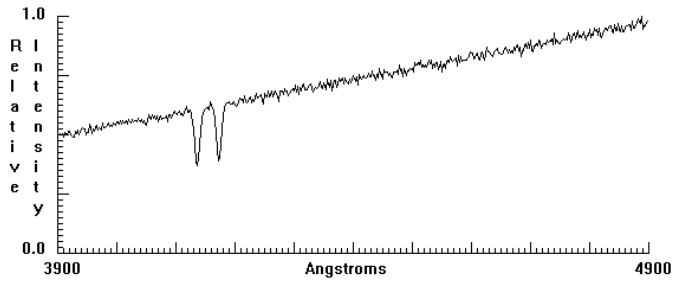


Figure 1

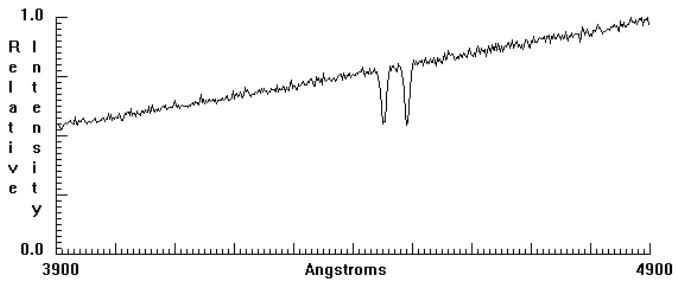


Figure 2

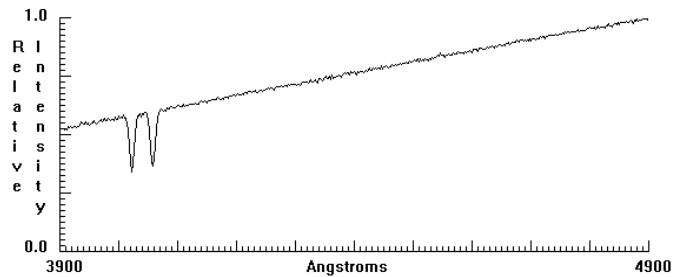
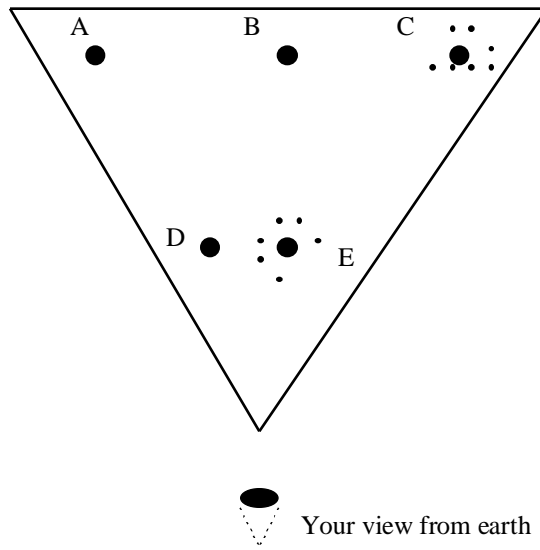


Figure 3

Closest _____ Most Distant _____

2. Below is figure illustrating a portion of the sky containing five galaxies.



- a. List two galaxies that are traveling at the same speed.
- b. What is the speed of these galaxies?
- c. List the two galaxies that would appear close to one another on a photograph of the sky?
- d. List a galaxy that is in the most distance portion of the sky shown here.

3. What is meant by the Hubble Redshift Distance Relation?

4. How can you tell the difference between a star and a galaxy?

5. Describe how galaxies are distributed throughout the universe.